

**Homework For Grade III (Girls Campus)**  
**English 2<sup>nd</sup> Homework**

1. Read the passage carefully and answer the following questions.

Singapore Zoo was officially opened on 27 June 1973. With a total land area of twenty –eight hectares and a grant of nine million dollars from the government, the main concept behind its design was for its animals to live as close to their natural habitats as possible.

Hailed as one of the most beautiful zoos in the world, it has more than two thousand eight hundred animals. Visitors to Singapore Zoo can embark on a jungle –like journey where they can admire flowers and animals from many different countries. Alternatively, they can board the tram which takes them around the zoo. If visitors want to have a different travelling experience around the zoo. If visitors want to have a different travelling experience around the zoo, they can choose to ride on a horse carriage.

Singapore Zoo focuses on teaching and conveying facts about the animals and their lifestyles by displaying educational information at each location. On top of that, shows are being put up by some animals like the elephants, the sea lions and the dogs. If you pay a small fee, which goes into the Wildlife Research and Conservation Fund, you can even take pictures with the snakes, the parrots and the elephants.

With a large number of successful births of many endangered species, Singapore Zoo aims to be the first institution in conversation, recreation and education.

1. When Singapore Zoo was officially opened?

---

---

2. What was the main idea behind the design of Singapore Zoo?

---

---

---

3. Name the three ways a visitor can move around Singapore Zoo to see the animals as mentioned in the passage.

a) \_\_\_\_\_

b) \_\_\_\_\_

c) \_\_\_\_\_

4. Do you think that Singapore Zoo is successful in its conservation of wildlife? Why and Why not?

---

---

---

**Vocabulary Booster**

concept: idea

hail : to be known as very good

embark: to start on something new or exciting

**2. Read the passage carefully and choose the best answer.**

When we talk about pollution, we are referring to the harmful substances released into the environment through natural or human activities. There are three kinds of pollution. They are air, land and water pollution.

Pollution exists both inside and outside our homes. Due to the negligence of human beings, air released from the burning of fuel in homes, vehicles and industries has caused 'holes' to appear in the ozone layer. Even smoke and cooking is considered a pollutant. As we spend more than eighty percent of our time indoors, the exposure to harmful indoor pollutants is just as serious as those of outdoors.

With the rise in living standards, the amount of waste produced daily also increases. Some waste collected is recyclable. Others that cannot be burnt or recycled are buried. Areas that are used as dumping grounds are limited and unwanted waste is fast piling up. To get rid of it quickly, some people simply throw it into the sea. Whether it is done deliberately or it forms part of the natural run-off, water pollution results from such manner. As drinking water and food are derived from both land and sea, our food gets contaminated and many marine lives are lost and may face the consequences of extinction.

1. Eruption from a volcano is considered as \_\_\_\_\_.
  - a) the result of human and natural activities, causing air pollution.
  - b) water pollution caused by both natural and human activities.
  - c) a natural form of air pollution.
  - d) land pollution caused by human activities.
2. The ozone layer has holes in it because of \_\_\_\_\_.
  - a) the air that is released from the burning of fuel.
  - b) a decrease in living standards.
  - c) the recycled waste materials.
  - d) harmful substances that are dumped into the sea.
3. Which of the following causes land pollution?
  - a) Smoke and cooking affecting the people.
  - b) Land that is needed to build factories for recycling waste.
  - c) The rise in living standards and the amount of waste recycled daily.
  - d) Higher living standards and an increase in the amount of waste produced only.
4. Dumping waste into the sea is not a solution as \_\_\_\_\_.
  - a) more holes will appear in the ozone layer.
  - b) all marine life will start to reproduce quickly.
  - c) eighty percent of our water will become polluted.
  - d) our food from the sea can gradually contain some harmful substances in it.
5. We can reduce \_\_\_\_\_ to prevent pollution from occurring.
  - a) our food and water intake.
  - b) the use of products that require burning or burial.
  - c) the number of times we travel in the air, on land and on water.
  - d) the use of toxic fuel and recyclable products.

## Vocabulary Booster

negligence: the act of not giving proper care and attention

contaminate: to have some harmful substance present in food or water

## Literature

Read chapter 09 and 10 thoroughly and write summary of both the chapters.

**O.P.E**

Read the story The Wizard of Oz (pg. no 92-93). Learn spellings of the difficult words.

## Composition

Write a descriptive essay on any one of the following topics.

- An Interesting Place I Visited.
- An Interesting Book I read.

Note: Read maximum stories and write their reviews during Summer Break.

Recommended Authors:

- ✓ Roald Dahl
- ✓ Enid Blyton






## Homework For Grade III (Girls Campus)

### Science 2<sup>nd</sup> Homework

#### Worksheet # 2

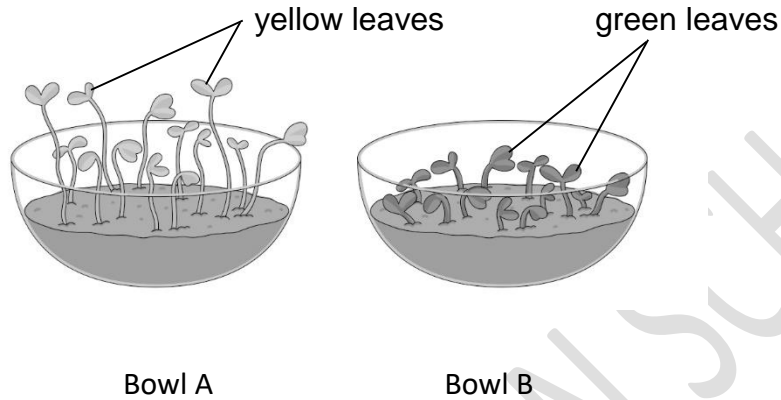
#### (Chapter # 4 and 5)

1. Complete the table.

Object	What is material object made up of?	Write two properties.
 <p>Telescope</p>		
 <p>Door</p>		
 <p>Knife blade</p>		
 <p>Slippers</p>		
 <p>Bucket</p>		

2. This picture shows two bowls containing seedlings.

One bowl was kept in a dark place for five days and the other bowl was kept in a bright place for five days.



(a) State **two** differences between the seedlings in bowls A and B in the table.

	Seedlings in pot A	Seedlings in pot B
Difference 1		
Difference 2		

(b) Which seedlings, the ones in bowl A or B, were kept in the dark?

\_\_\_\_\_

(c) Explain your answer in (b).

\_\_\_\_\_

\_\_\_\_\_

3. Complete the sentences.

(a) Antarctica is a very \_\_\_\_\_ (Warm/Cold/Hot) place.

Plants \_\_\_\_\_ (can/cannot) grow well here.

(b) Desert is a very \_\_\_\_\_ (Warm/Cold/Hot) place.

Plants \_\_\_\_\_ (can/cannot) grow well here.

(c) Rainforest is a \_\_\_\_\_ (Warm/Cold/Hot) place.

Plants \_\_\_\_\_ (can/cannot) grow well here.

4. Read Chapter 4 and 5 from Pupil's Book.



**Homework For Grade III (Girls Campus)**  
**Islamiyat 2<sup>nd</sup> Homework**

Read the following chapters and complete the task that follows.

- i. Good manners are a part of faith
- ii. Prophet Musa (A.S)

Task 1: Complete the following appropriately.

- i. \_\_\_\_\_ eats and drinks with his left hand.
- ii. Prophet Musa(A.S) was born in \_\_\_\_\_.
- iii. We should \_\_\_\_\_ up the food that drops while eating.
- iv. Musa's mother put him in a basket and left him floating in the river \_\_\_\_\_.

Task 2. Answer the following questions.

- i. Why is it important to walk gently on the streets?
- ii. What do you know about Pharoah?

Task 3: Write at least five manners of eating and drinking.


Task 4: Find meanings of the following words from the dictionary.

- i. Tread
- ii. Wander
- iii. Cruel
- iv. grief

**Homework For Grade III (Girls Campus)**  
**Math 2<sup>nd</sup> Homework**

Q.1: Fill in the blanks.

i. How many three's make 27? \_\_\_\_\_

ii. 36 divided by 6 is \_\_\_\_\_

iii. \_\_\_\_\_  $\div 5 = 40$

iv. There are four hundred and seventeen pencils in the box. Which number represent the number of pencils in the box?

a) 470

b) 417

c) 407

v. 1 kg = \_\_\_\_\_ g

vi. I am a two digit number. I have 3 at tens place. Which number am I?

a) 13

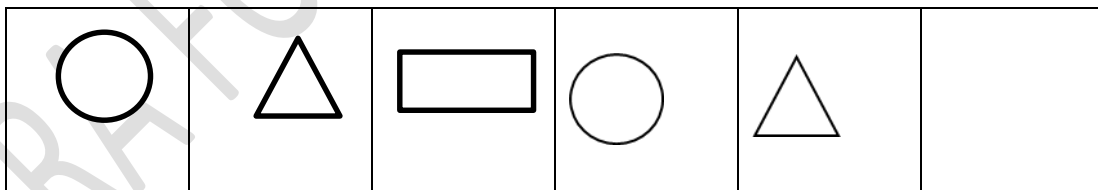
b) 37

c) 43

vii. Share 25 equally among 5 \_\_\_\_\_

viii. Subtract 400 from 750 \_\_\_\_\_

viii. Draw the last shape.



ix. What is the remainder when 13 is divided by 4? \_\_\_\_\_

x. 5000 g = \_\_\_\_\_ Kg

Q.2: Which number am I?

17

14

16

23

a) When divided by 5 my remainder is 3. \_\_\_\_\_

b) Divide me by 3 or by 4 and my remainder is 2. \_\_\_\_\_

Q.3: How many 5cm lengths can be cut from 133cm of string? How many string is left over?

Q.4:

Grade



### Conversion of weights

1. Write the weights after examining the pictures carefully.

a. 2 packets of salt .....

b. 4 packets of sugar .....

c. 1 packet of tea .....

d. 5 bars of chocolate .....

e. 2 packets of milk .....

f. 1 bottle of honey .....



2. Convert into grams.

a. 2 kg 500 gm = .....

b. 5 kg 580 gm = .....

c. 4 kg 450 gm = .....

d. 3 kg 80 gm = .....

3. Convert into kilograms.

a. 2750 g = ..... kg ..... gm.

b. 4950 g = ..... kg ..... gm.

c. 7580 g = ..... kg ..... gm.

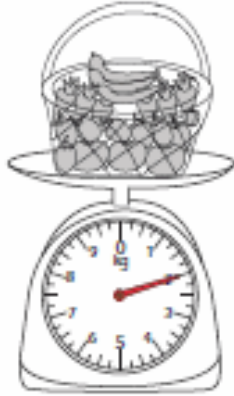
d. 1150 g = ..... kg ..... gm.



### Measuring Weight

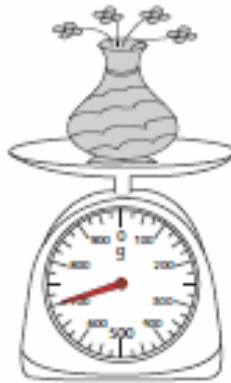
Measure the weight of each object.

1)



\_\_\_\_\_ kg

2)



\_\_\_\_\_ g

3)



\_\_\_\_\_ kg

4)



\_\_\_\_\_ g

5)



\_\_\_\_\_ kg

6)



\_\_\_\_\_ kg

7)



\_\_\_\_\_ g

8)



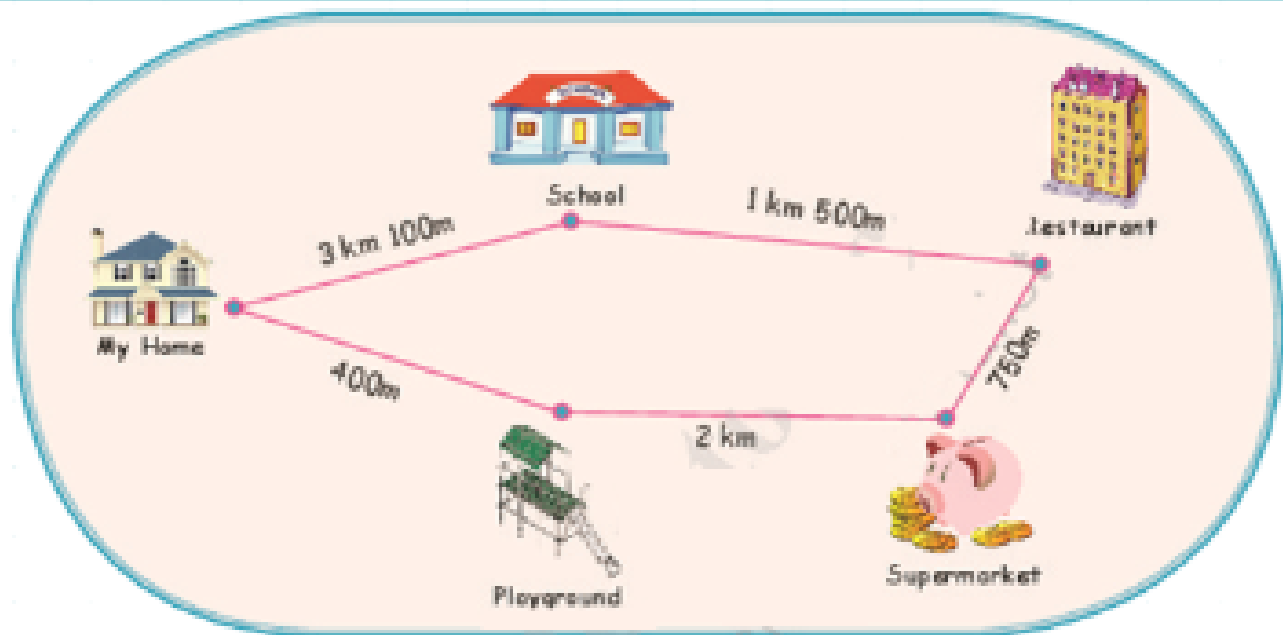
\_\_\_\_\_ kg

9)



\_\_\_\_\_ kg


## Neighbourhood




- How far is the school from my home?  
.....
- How many meters is the playground from my home?  
.....
- How far is the supermarket from the restaurant?  
.....
- Is the school or the playground closer to the supermarket?  
.....
- What is the shortest distance between the playground and the my home?  
.....
- What is the shortest distance between the school and my home?  
.....
- How much will you have to walk to go to all functions once?  
.....

**Measuring Objects - Paper Clips**


Measure each object using paper clips.




paper clips




paper clips




paper clips



paper clips



paper clips



paper clips

## Measurement

Write the correct unit - cm, m, g, kg, l, ml.

Length of



30 \_\_\_\_\_

Jam in



200 \_\_\_\_\_

Juice in



100 \_\_\_\_\_

Length of



2 \_\_\_\_\_

Weight of



2 \_\_\_\_\_

Milk in



1 \_\_\_\_\_



## Homework For Grade III (Girls Campus)

### Computer 2<sup>nd</sup> Homework

Character formatting	Font	Home	default settings	Paragraph
Quick Access	Shading tab	Text Highlight	Alignment	Text effects



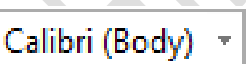


**1. Fill in the blanks with appropriate words given above in box.**

1. \_\_\_\_\_ is the set of letters, numbers or symbols.
2. Settings that are standard or pre-defined in a software are called \_\_\_\_\_.
3. \_\_\_\_\_ consists of text properties such as bold, italic, underline, font type and font color.
4. You can find Font group on \_\_\_\_\_ tab.
5. Different kinds of effects can be applied on the text by using \_\_\_\_\_.
6. \_\_\_\_\_ toolbar represents the most commonly used buttons such as undo, redo and save.
7. By using \_\_\_\_\_ you can highlight any important text in your document.
8. Borders button found in \_\_\_\_\_ group.
9. We can select color for the shading in text by  
 Borders → Borders and shading → \_\_\_\_\_.
10. \_\_\_\_\_ is the manner in which text is placed between the margins of a page.

**2. Write short keys of following commands.**

S.no	Commands	Short Keys
1	To save a document	
2	Align text center	
3	Align text left	
4	Align text right	
5	Align text justify	
6	Undo	
7	Redo	
8	Copy text	
9	Cut text	
10	Paste text	

**3. Match following buttons with their names.**

	Borders
	Text effects
	Text Highlight
	Font name
	Underline

## Homework For Grade II (Girls Campus)

### Urdu 2<sup>nd</sup> Homework

سوال نمبر ۱۔ مندرجہ ذیل عبارت پڑھ کر سوالات کے جوابات دیں۔

کرونا وائرس ایک وبائی مرض ہے جو کہ پوری دنیا میں پھیل چکا ہے۔ کرونا وائرس سے بچنے کے لیے ضروری ہے کہ ہم اپنے ہاتھ، پیر اور جسم کو صاف ستھرا رکھیں اپنے ہاتھ صابن سے اچھی طرح دھوئیں۔ وضو کریں اور نماز پڑھیں کیوں کہ وضو سے ہمارا حلق اور ناک صاف ہو جاتی ہے اس طرح اس بیماری کے جراثیم ہمارے جسم کے اندر داخل نہیں ہوں گے تو ہم اس بیماری سے محفوظ رہ سکتے ہیں۔ گھر کا پکا ہوا کھانا کھائیں اور باہر کے کھانوں سے پرہیز کریں۔ پھل اور سبزیوں کا استعمال زیادہ کریں۔ چھینک یا کھانسی کی صورت میں اپنے منہ یا ناک پر ہاتھ رکھیں۔ اگر ہم ان چھوٹی چھوٹی باتوں کا خیال رکھیں گے تو بڑی بڑی بیماریوں سے بھی بچ سکتے ہیں۔ دوسروں کو بھی یہ باتیں بتائیں۔

س ۱۔ کرونا وائرس سے کس طرح محفوظ رہ سکتے ہیں؟

ج۔

س ۲۔ وضو سے کیا فائدہ ہوتا ہے؟

ج۔

س ۳۔ چھینک یا کھانسی کی صورت میں ہمیں کیا کرنا چاہیے؟

ج۔

س ۴۔ کھانے پینے میں کیا احتیاط کرنی چاہیے؟

سوال نمبر ۱۔ صفائی نصف ایمان ہے۔ اس عنوان پر چند جملے لکھیں


سوال نمبر ۱۔ میر اقبال (کتاب) پڑھیں اور علامہ اقبال کے بارے میں چند جملے لکھیں

[illegible]