



ADMISSION TEST PAPER

SESSION 2023-2024

Duration: 2 hours

Class V-R+Hifz

Student's Name: _____

Father's Name: _____

Subject	Total Marks	Obtained Marks	Percentage
ENGLISH	20		
MATHEMATICS	20		
URDU	20		
ARABIC	20		
NAZRA QURAN	20		
TOTAL	100		

Invigilator's Name & Sign: _____

Checker's Sign & Remarks: _____

Qari / Qari's Sign & Remarks: _____

Section Head's Sign & Remarks: _____

Campus Incharge's Sign & Remarks: _____



Admission Test Paper 2023-2024

Grade – 5 Regular + Hifz

English

Name: _____ Date: _____ Max Marks: / 20

Q1. Read the text and answer the questions given below:

The Importance of Recycling

Recycling is when you take old things and transform them into new things. It sounds strange. But it's actually very scientific. Do you know how it all works? The first thing you have to do is to collect the items that can be recycled. Remember only certain materials can be recycled like; These include things made out of paper, metal, glass and plastic.

Can you think of everyday items made out of these materials? Soda cans are a good example. They are made out of metal. Magazines and newspapers are made out of paper. So are cereal boxes. Some bottles of juice are made out of glass. Bags and yogurt containers are made out of plastic. There are many things that can be recycled.

These things are usually stamped with the recycling loop. It has 3 arrows that go in a triangular circle. This shows that the cycle continues. Items are thrown away but continue their lives as something else.

Let's get back to the process of recycling. Once you put all your items in a recycling bin, a truck comes to pick them up. Everything goes to a recycling plant. There, the materials get separated. They go into different piles. There are special machines that crush each pile together. The materials get squashed into square cubes. They are really heavy. You would need a forklift to carry them. Companies buy these cubes and turn them into new products.

Now let's take a closer look at how old paper is transformed. First the paper is torn into tiny pieces. Then special water with chemicals is poured onto it. The fibers start to stick together. In time, a brand new roll of paper is created! If there were things written or printed on the first paper, they disappear. Recycling keeps our planet healthy. It reduces waste. It also saves energy. You can do your part. So just remember the golden rule: **always recycle your products!**

1. Give four examples of household items that can be recycled.

/02

a) _____

b) _____

c) _____

d) _____

2. When old paper is transformed into new paper, what causes the fibers of the tiny pieces of paper to stick together?

/01

a) a thick, sticky paste

b) a special water with chemicals poured onto it

c) a very strong glue

d) a yellow powder

3. Write a number (1 – 4) to put each step of recycling in correct order.

/02

☐

Companies buy the cubes of crushed materials and turn them into new products.

☐

The items you put in your recycling bin get picked up by a truck and brought to a recycling plant.

☐

The materials get separated into different piles.

☐

Special machines crush each pile into a square cube.

4. What do the three arrows of the recycling loop show?

/01

Q2. Choose the synonym for each word given below.

/01

1. strong _____
2. loyal _____

Q3. Complete the given by using the suitable similes.

/02

1. as beautiful as the _____
2. as cold as _____
3. as green as _____
4. as sweet as _____

Q4. Complete the given passage by using the following conjunctions.

/ 04

and but because for

Everybody around Ali seemed to laugh. Somebody offered him a strange, dark-purple fruit. He hesitated_____he distrusted strange foods. Also his mother taught him to wait _____elders to eat first, _____the old woman pointed up at the trees, where the purple fruits grew together in large bunches. He discovered that it tasted delicious, not too sweet, _____slightly fizzy.

Q5. Choose the correct form of the verb that agrees with the subject.

/02

1. Everyone (has / have) done his or her homework.
2. Maria and Sarah usually (plays / play) together.
3. Every year, during the midsummer festival, the smoke of village bonfires (fills / fill) the sky.
4. A number of students (was / were) absent .

/05

This image shows a single sheet of white paper with horizontal blue ruling lines. The lines are evenly spaced and run across the width of the page. There are no margins, text, or other markings on the paper.



Admission Test Paper 2023-2024

Grade – 5 Regular + Hifz

Math

Name: _____ Date: _____ Max Marks: /20

Q1 (a) Write in numbers. [2]

i. 1 hundred 2 tens 9 ones _____

ii. 6 hundred 3 ones _____

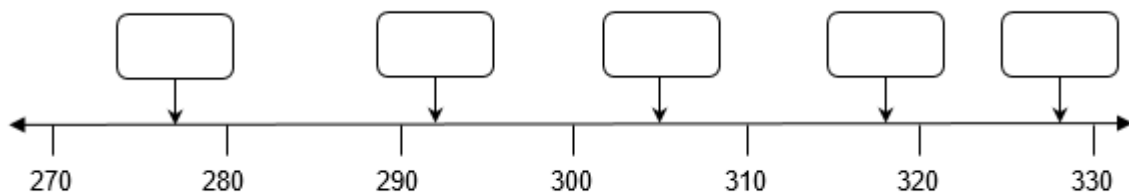
Q1 (b) Complete the sentences. [1]

i. The digit 7 in 789 is in the _____ place. Its value is _____.

Q1(c) Write the numbers in the correct boxes on the number lines. [4]

You will not need all of the boxes.

305 328 277 318



Q2: Solve the following: [4]

Add

a) 5 8

$$\begin{array}{r} + 4 \quad 9 \\ \hline \\ \hline \end{array}$$

Subtract

b) 5 7

$$\begin{array}{r} - 4 \quad 4 \\ \hline \\ \hline \end{array}$$

Q3 Multiply and Divide the following.

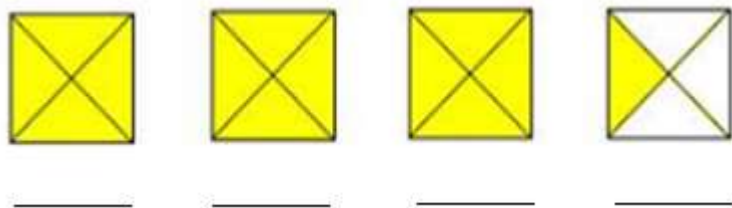
[2]

(a) $38 \times 13 = \underline{\hspace{2cm}}$.	(b) $64 \div 8 = \underline{\hspace{2cm}}$.
---	--

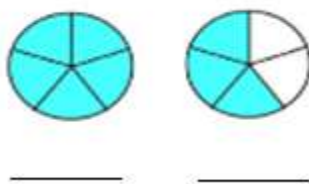
Q4 Write in fractions number.

[2]

a)



b)



Q5 Mr. Tay bought a cake and some flowers from a shop.

He paid a total of \$100. How many flowers did Mr Tay buy?

[2]

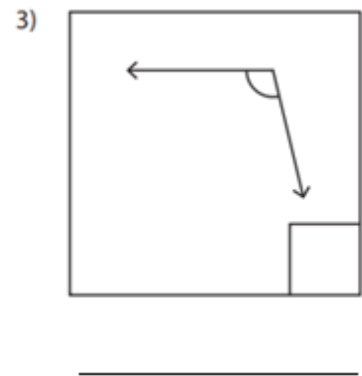
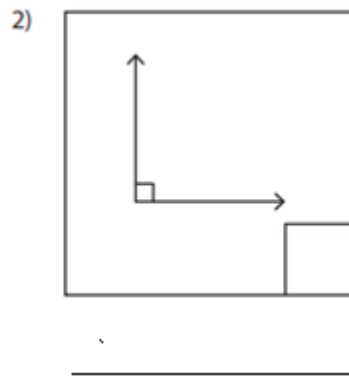
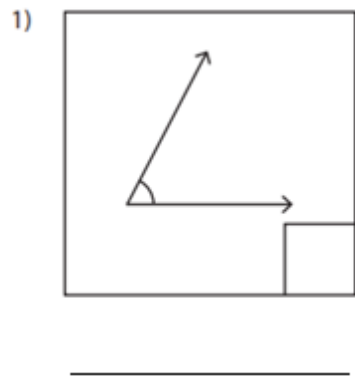
Cake : \$40 Flowers : 10\$

Q6 Look at the gives pictures and write the correct type of angles from the box. [3]

Accurate angle

right angle

obtuse angle





Admission Test Paper 2023-2024

Grade – 5 Regular+Hifz

Urdu

Name: _____ Date: _____ Max Marks: /20

ہدایات: مندرجہ ذیل تمام سوالات کے جوابات تحریر کریں۔ اور لکھائی خوشخط کریں۔

[/۳]

سوال نمبر ۱: مندرجہ ذیل الفاظ کے جملے بنائیے۔

جملے	الفاظ
	انسان
	غم
	توجہ

[۳/]

سوال نمبر ۲: مندرجہ ذیل واحد کے جمع "ین" کا اضافے کی مدد سے بنائیے۔

مثلاً: معلم سے معلمین

واحد	جمع
فاتح	
مصنف	
حاضر	

[۴/]

سوال نمبر ۳: مندرجہ ذیل کالم الف میں دیئے گئے محاورات کو کالم ب سے دیئے گئے معانی سے ملائیے۔

معانی	محاورات
مزرہ چکھانا	کان کھڑے ہو جانا
جھوٹی تعریف کرنا	بوجھ بانٹنا
ہوش آنا	خبر لینا
ذمہ داری میں ساتھ دینا	حواس بحال ہونا
ہوشیار ہو جانا	شیخیاں بھگارنا

الاسم: _____

الرقم المسلسل: _____

الصف و القسم: _____

التاريخ: _____

الوقت: _____

مجموع الارقام: _____

20

الارقام المحصلة: _____

المراقبة: _____

توقيع المعلمة او المعلم : _____

التصحيح الاخير: _____

[05]

السؤال الأول

املاً الفراغات ب "هذا، هذه أو هؤلاء".

Fill in the following blanks with “This (male or female) or These”.

١. _____ مهندس .

٢. _____ مهندسون .

٣. _____ معلمة .

٤. _____ أطباء .

٥. _____ رجل .

[5]

السؤال الثاني

اختر الإجابة الصحيحة .

Choose the correct answer.

١. بنت	ذلك، تلك، أولئك
٢. شجرة	ذلك، تلك، أولئك
٣. معلمات	ذلك، تلك، أولئك
٤. ولد	ذلك، تلك، أولئك
٥. سيارة	ذلك، تلك، أولئك

[5]

السؤال الثالث

اقرأ النص .

Read the following passage :

النص : الصوصُ الشريرُ

- 1/ ذَهَبَتْ دَجَاجَةٌ مَعَ صِغَارِهَا إِلَى حَقْلٍ فَأَخَذُوا يَلْتَقِطُونَ الْحُبُوبَ .
قَالَتِ الْأُمُّ : لَا تَبْتَعِدُوا عَنِّي .
- 2/ رَأَى صَوْصٌ دُودَةً صَغِيرَةً فَأَسْرَعَ إِلَيْهَا وَ نَسِيَ مَا قَالَتِ الْأُمُّ فَأَخْطَفَتْهُ قِطْعَةً .
- 3/ ذَهَبَتِ الْأُمُّ إِلَى الْكَلْبِ لِلْمُسَاعَدَةِ وَ قَالَتْ : " مِنْ فَضْلِكَ أَنْقِذْ وَلَدِي. "
- 4/ ذَهَبَ الْكَلْبُ إِلَى الْقِطْعَةِ وَ نَبَحَ فِي غَضَبٍ فَخَافَتِ الْقِطْعَةُ وَتَرَكَّتِ الصَّوْصَ وَ صَعَدَتْ عَلَى الشَّجَرَةِ.
- أجب عن الأسئلة التالية .

Answer the following questions.

١ . إلى أين ذهبت دجاجة؟	
٢ . ماذا فعلت الدجاجة و صغارها؟	
٣ . ماذا رأى صوص؟	
٤ . إلى من ذهبت الأم للمساعدة؟	
٥ . أين صعدت القطة؟	

[5]

السؤال الرابع

اكتب فقرة عن نفسك .

Write a paragraph about yourself.

اختبار الالتحاق بالمدرسة

٢٠٢٣-٢٠٢٤
